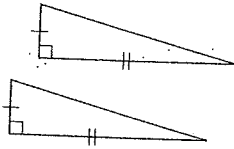


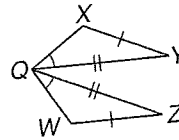
Congruence of Triangles Practice

Determine which postulate can be used to prove that the triangles are congruent. If it is not possible to prove that they are congruent, write not possible.

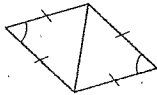
1.



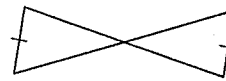
7.



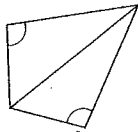
2.



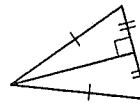
8.



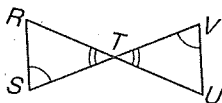
3.



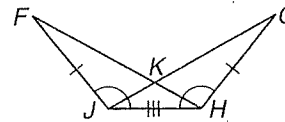
9.



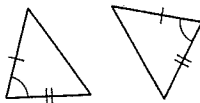
4.



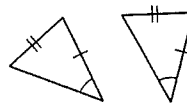
10.



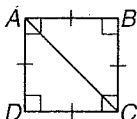
5.



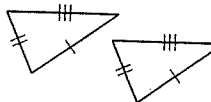
11.



6.



12.



13.

