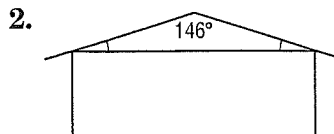


4-2 Skills Practice

Angles of Triangles

Find the missing angle measures.

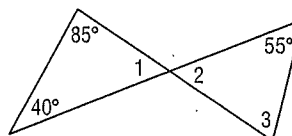


Find the measure of each angle.

3. $m\angle 1$

4. $m\angle 2$

5. $m\angle 3$

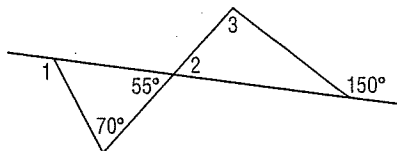


Find the measure of each angle.

6. $m\angle 1$

7. $m\angle 2$

8. $m\angle 3$



Find the measure of each angle.

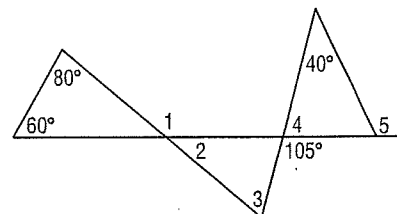
9. $m\angle 1$

10. $m\angle 2$

11. $m\angle 3$

12. $m\angle 4$

13. $m\angle 5$



Find the measure of each angle.

14. $m\angle 1$

15. $m\angle 2$

