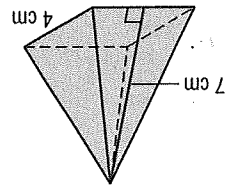


12-4

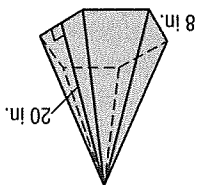
Skills Practice

Surface Areas of Pyramids

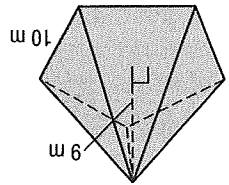
Find the surface area of each regular pyramid. Round to the nearest tenth if necessary.



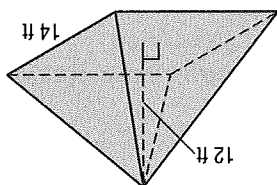
1.



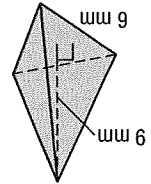
2.



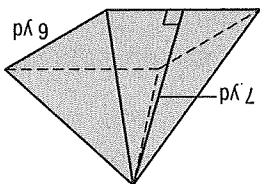
3.



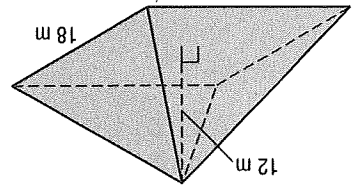
4.



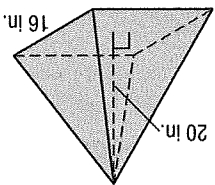
5.



6.



7.



8.